


Two digit subtraction I

- 1 Lena is 33 years old. Her son, Jimmy, is 21 years younger. How old is Jimmy?




A:

- 3 Lara has \$79. She spends \$57 on a new bike. How much does Lara have left?



A:

- 5 Kevin has 29 marbles and Maha has 18. How many more marbles than Maha does Kevin have?



A:

- 7 A chicken found 56 seeds on the ground. It ate 36 seeds then walked away. How many seeds left on the ground?



A:

- 9 How many more gold medals than Russia did China win at the 2008 Beijing Olympics?

Gold Medal Tally Beijing 2008

China	51
USA	36
Russia	23

A:

- 2 Heidi came in second place with a time of 84 minutes. Casey won the race 5 minutes ahead of Heidi. What was Casey's winning time?

2nd Place 1st Place



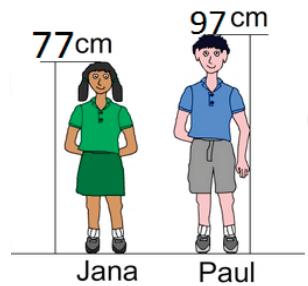
A:

- 4 Together Andrew and Carla have 23 cards. If Carla has 12, how many cards does Andrew have?



A:

- 6 What is the difference in height between Paul and Jana?



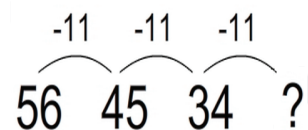
A:

- 8 The table shows the total number of cows and sheep on a farm. How many sheep on the farm?

Animals on the Farm		
cows		38
sheep		??
Total number of cows and sheep		89

A:

- 10 The rule for the number pattern is shown. What's the fourth number in the pattern?



A: