

Mass

Name:

Date:

1. How heavy is the block?



- 450g 900g
 2000g 1000g

2. What's the weight of the apple?

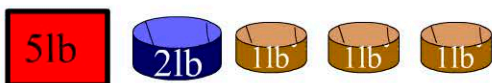


weight = ounces

3. How heavy is a mouse for a computer?

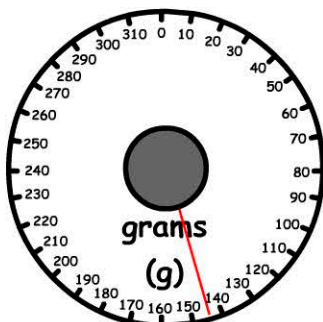
- 4oz 1lb
 10oz 3lbs

4. What's the total weight?



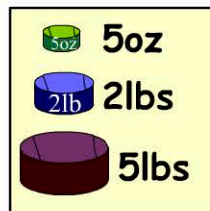
- 80oz 240oz
 160oz 360oz

5. What item is being weighed?



- A pineapple
 A grape
 A chicken
 An apple

6. How much does the full jug weigh?



- 9lbs 9lbs 5oz
 905oz 95oz

7. Estimate George's weight.




- GEORGE** 30lbs
 94lbs
 160lbs
 220lbs

8. Sally weighs 102lbs. How much heavier than George is she?

- 6lbs 8lbs
 10lbs 12lbs

9. How many weights are needed to weigh 3lbs?



10. 5lbs = ounces