


Name: _____

Place Value and expanded form
- hundreds, tens and ones



hundreds

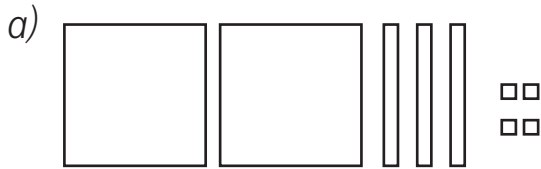


tens



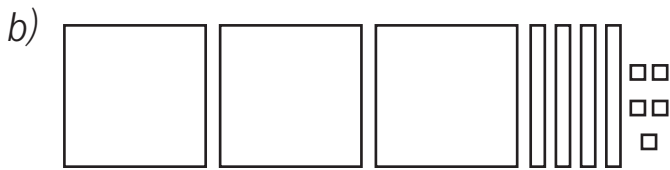
ones

Write in **expanded form** and write the number that it makes.



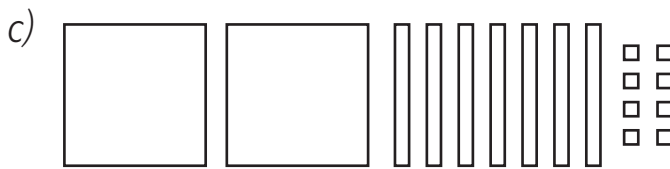
Expanded form:

_____ + _____ + _____ = _____



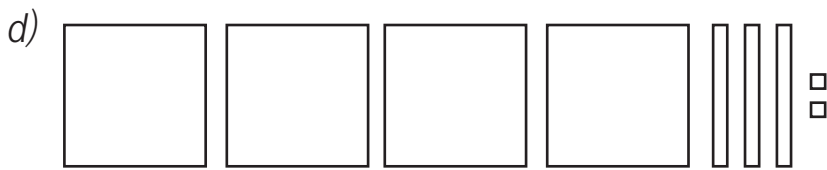
Expanded form:

_____ + _____ + _____ = _____



Expanded form:

_____ + _____ + _____ = _____



Expanded form:

_____ + _____ + _____ = _____

Adding hundreds and tens: Try drawing the hundreds or tens on the diagram to help you.

a) Add three hundred to this number.



_____ + 300 = _____

b) Add twenty to this number.



_____ + 20 = _____

c) Add four hundred and ten to this number.



_____ + 410 = _____