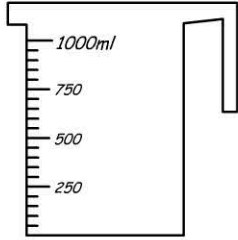


Volume & Capacity

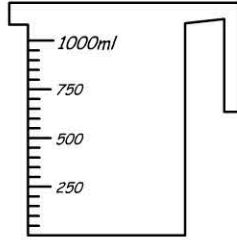
Measuring capacity in milliliters.

Name: _____

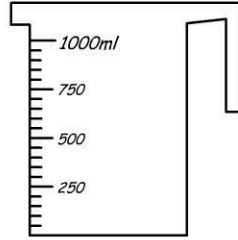
Colour to fill each measuring jug to the levels indicated below.



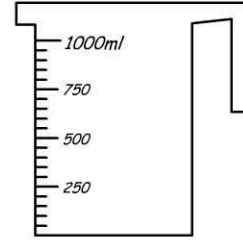
500ml



750ml

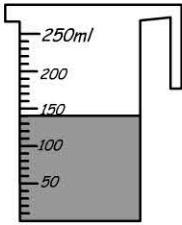


250ml

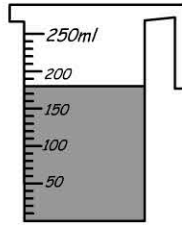


1000ml

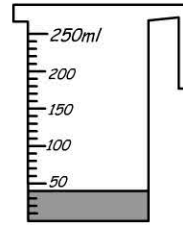
How many millilitres of liquid are in each of these measuring cups?



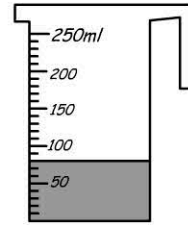
_____ ml



_____ ml

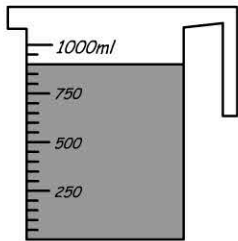


_____ ml



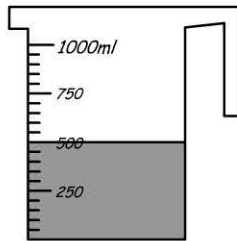
_____ ml

How much liquid is needed to fill each jug to 1 litre?



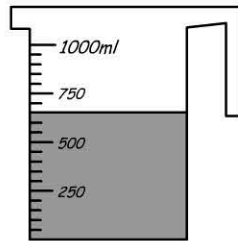
1000 ml -

_____ ml



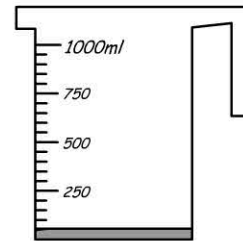
1000 ml -

_____ ml




1000 ml -

_____ ml

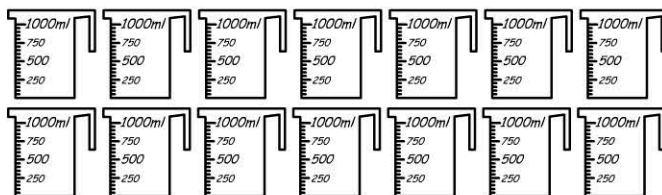


1000 ml -

_____ ml



Colour the amount needed to fill the bucket.



How many 250ml measuring cups would be needed to fill the bucket?