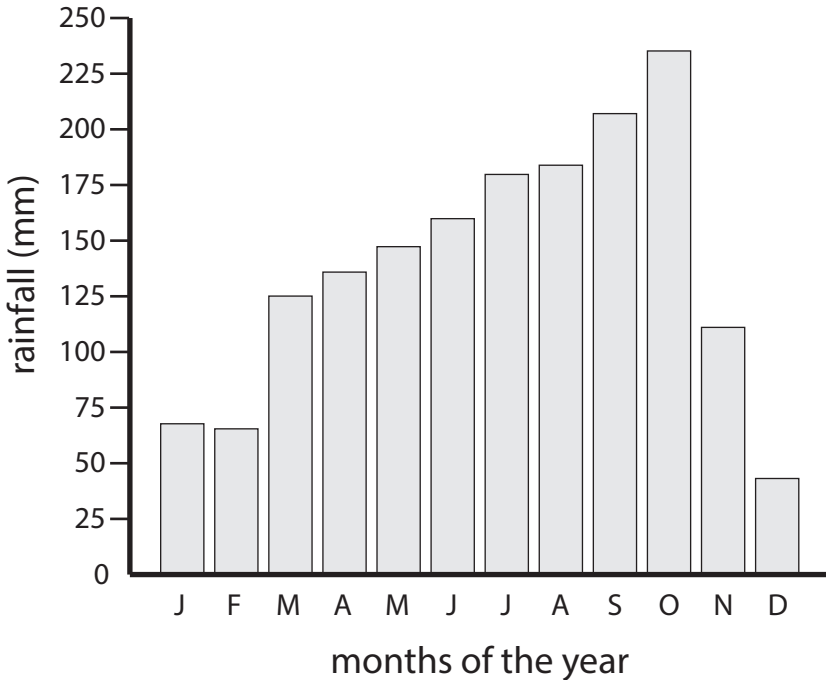


Name: _____

1) The graph shows the monthly average rainfall for Tokyo.

Average Monthly Rainfall for Tokyo

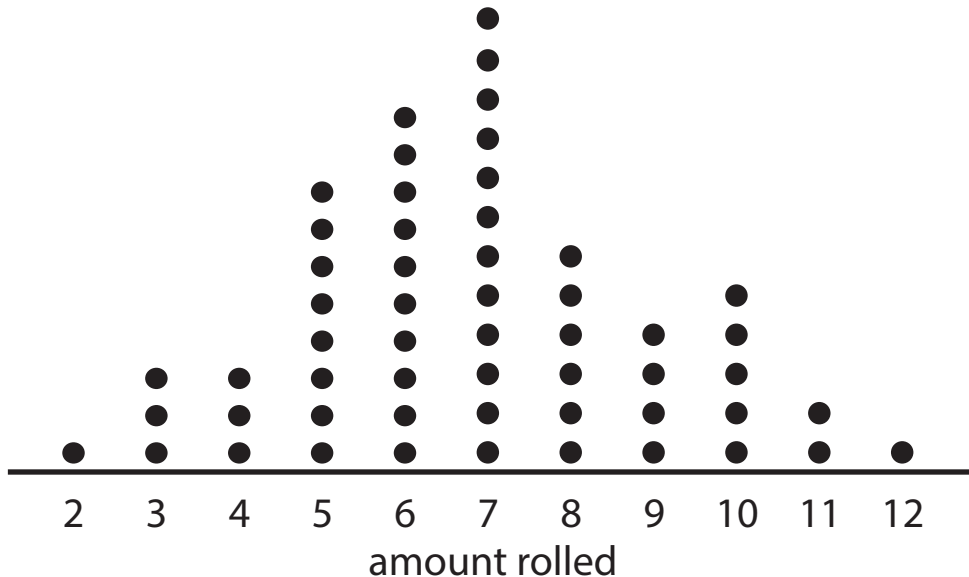


a) Which is the wettest month of the year? _____

b) What is the average rainfall for March? _____

c) What is the approximate average rainfall for the summer months? (June - August) _____

2) Two dice are rolled 55 times. The graph shows the number of times each amount is rolled.



a) How many times was six rolled? _____

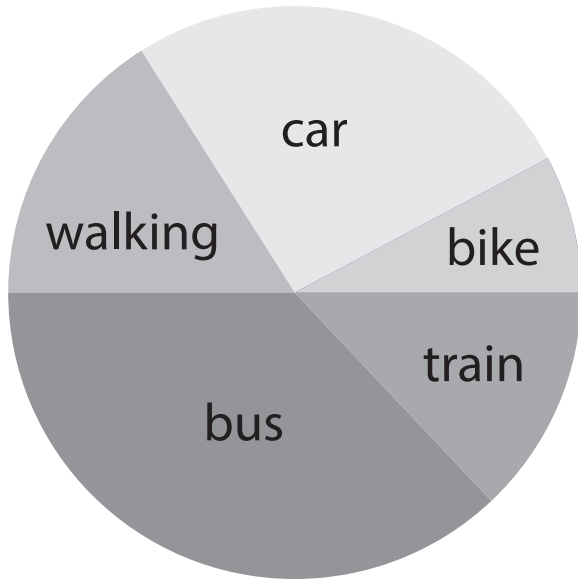
b) How many times was an amount greater than eight rolled? _____

c) What were the two least amounts rolled? _____

Name: _____

3) The graph shows how 1000 students get to school each day.

Methods of Getting to School

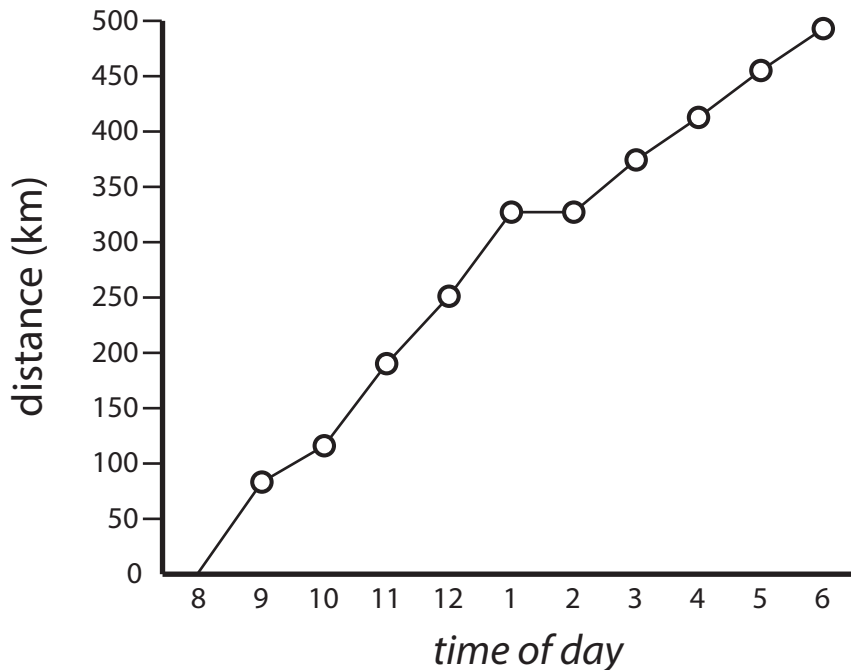


a) How many students catch a bus or a train? _____

b) About how many students get driven to school in a car? _____

c) About how many students ride their bikes to school? _____

4) The graph shows the distance a family drove from 8 a.m. to 6 p.m.



a) About how far did the family drive from 8 a.m. to 12 p.m.? _____

b) At what time did the family stop for a one-hour break? _____

c) By what time had the family driven 200 km? _____