



Single digit addition

- 1 Con caught 7 fish in the morning and 3 fish in the afternoon. How many fish did Con catch in the day?



A: 10

- 3 Jack counted 5 seagulls in his yard on Saturday and 9 on Sunday. What is the total number of seagulls that landed in his yard.




A: 14

- 5 During the sale 7 pairs of black shoes and 3 pairs of red shoes were sold. How many pairs of shoes were sold during the sale?



A: 10

- 7 In my group there are 4 boys and 4 girls. How many students in my group?




A: 8

- 9 Sally treated 2 white cats and 3 brown cats. How many cats did she treat?



A: 5

- 2 On Tuesday 4 girls and 5 boys were born. On Tuesday, how many babies were born?



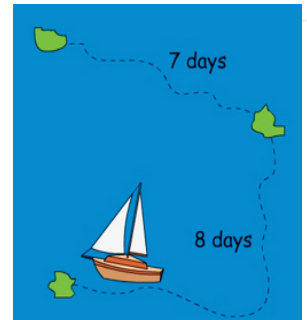
A: 9

- 4 Both Sarah and Sam each ate 4 pieces of toast. How many pieces of toast did they eat altogether?




A: 8

- 6 It took the sailor 8 days to reach the first island and 9 days to reach the second island. How long did the journey take?



A: 17

- 8 Joe took 2 steps. Then he took another 4 steps. How many steps did he take?



A: 6

- 10 Jim rode for 3 hours in the morning and 5 hours in the afternoon. What is the total number of hours ridden by Jim?



A: 8