




Name:

1. Birthdays

May	
June	 = 4
July	

Which month has the most birthdays?







- May July
 June

2. How many people have birthdays in July?

3. How many people have birthdays in May or June?

- 6 2
 10 4

4. Cars That Went Past Our School

red		
blue		
green		







How many blue cars went past the school?

- 3 5
 6 4

5. How many more blue cars than red cars went past the school?

- 1 3
 2 4

Our Eyes

brown		
green		
blue		 = 3

6. How many children have brown eyes?

- 5 6
 3 4

7. Which has the most?

-  brown  blue
  green  black

OUR PETS

cats	dogs	mice
4	8	3

8. How many children have a dog?

- 8 3
 4 10

9. How many children have a cat as a pet?

10. How many more children have a dog than a mouse?