

- 1 In the tennis competition there are 7 teams. If each team has 2 players, how many people competing?



A:

- 3 At the dance there are 2 balloons on each wall. The room has 4 walls, how many balloons are there in the room?



A:

- 5 There are 2 sausages in each pan. How many sausages in 3 pans?



A:

- 7 Carol earned 3 stars each day. How many stars did Carol earn in the first 2 days?




A:

- 9 At Ron's cafe there are 6 tables. If each table has two chairs, how many chairs altogether?



A:

- 2 Each team at the club needs 3 training balls. If there are 2 teams, how many balls are needed?




A:

- 4 Mary bought 2 cake packets. If each packet has 4 cakes, how many cakes did Mary buy?



A:

- 6 The cows walked to the shed in 5 groups of 2. How many cows altogether?




A:

- 8 Ayan painted 2 pictures a day for one week. How many pictures did she paint altogether?



A:

- 10 There are 2 birds in each tree. How many birds in 6 trees?



A: