

Mass

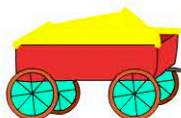
Name:

Date:

1. How many kilograms in one tonne?

- 10000 100
 1000 10

2. There are kilograms in $\frac{1}{4}$ of a tonne.



total weight = 3170kg
trailer = 390kg

3. What is the weight of the sand?


- 730kg 3560kg
 390kg 2780kg

4. *One litre of water weighs 1 kilogram.*

How much would $6\frac{1}{2}$ litres of water weigh?

- 6.5kg 65.5kg
 65kg 655kg

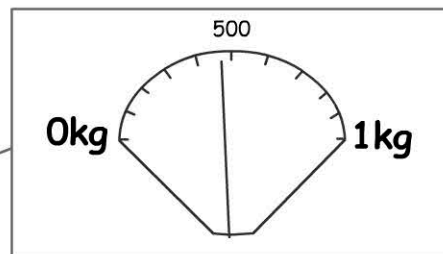
5. What is the approximate weight of each lemon?



- 150g 175g 50g 1050g



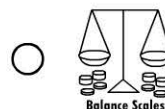
Kitchen Scales



6. How much does the piece of watermelon weigh?

- 400g 470g
 440g 500g

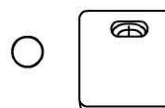
7. Which measuring device would Andy use to weigh himself?



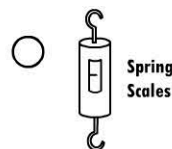
Balance Scales



Kitchen Scales



Bathroom Scales



Spring Scales

8. How much do you think Andy weighs?

- 350grams 74kg
 2.7tonne 405kg

9. $50g + 0.5kg =$ grams

10. $\frac{3}{4}kg + 500g + 1kg =$ grams