

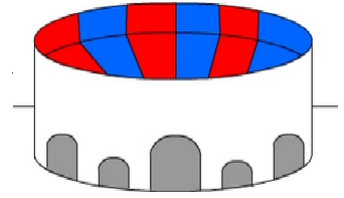
Multiplying by 10 or 100: Activity 1

- 1 There are 125 balls in each box. How many balls in 10 boxes?



A: 1250

- 2 The stadium has 855 seats in each section. If there are 100 sections, how many seats in the stadium?



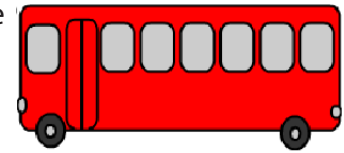
A: 85500

- 3 Each crate weighs 86 kg. What is the TOTAL weight of the truck's load that comprises of 100 crates? Answer in kilograms.



A: 8600

- 4 The bus shown has a seating capacity of 58 passengers. What is the maximum number of seated passengers 10 bus loads can carry?



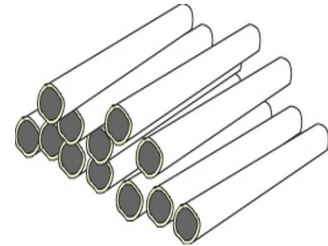
A: 580

- 5 Jack planted 87 rows of lettuces. He planted 100 lettuces in each row. How many lettuces did he plant?



A: 8700

- 6 To complete an order, a pipe manufacturing plant made 100 pipes a day for 48 days. How many pipes were made?



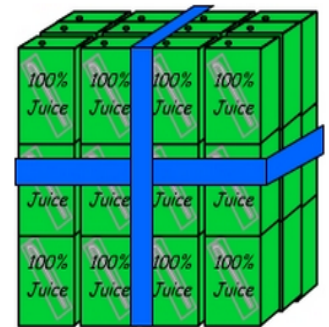
A: 4800

- 7 At the building site there are 74 stacks, with 10 bricks in each stack. How many bricks altogether at the site?



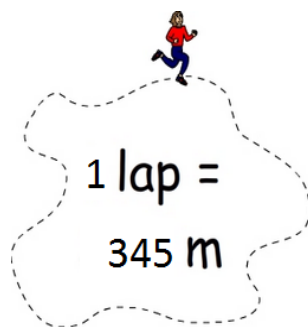
A: 740

- 8 Drink cartons are packaged in groups of 36. 10 packages are delivered to a supermarket. How many drink cartons were delivered?




A: 360

- 9 Freda ran 10 laps of a 345 m track. How far did she run?



A: 3450

- 10 The printer shown can print 265 pages per hour. How many pages can it print in 10 hours?



A: 2650