

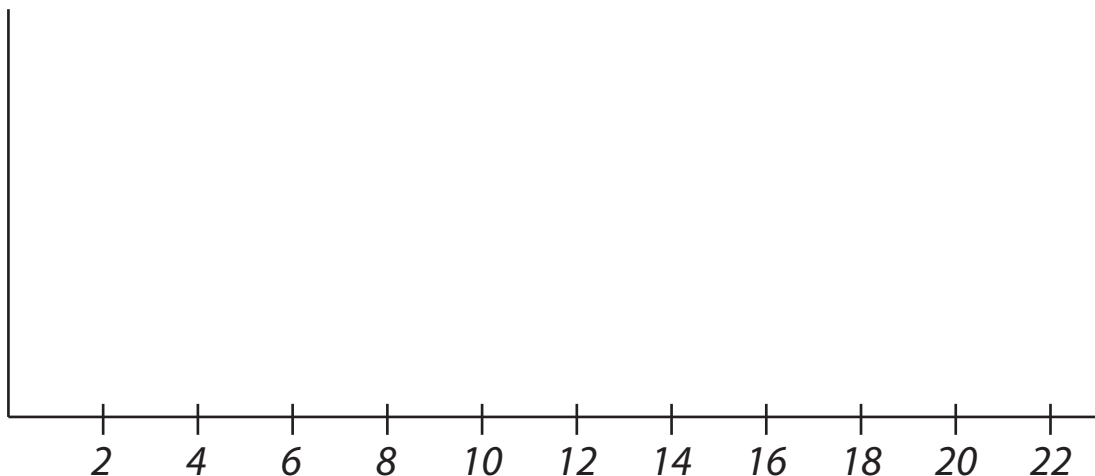
Name: _____

1) The table shows the sports played by students at a school.

	<i>tennis</i>	<i>hockey</i>	<i>football</i>	<i>netball</i>
<i>grade 3</i>	21	8	14	12
<i>grade 4</i>	11	12	22	17
<i>grade 5</i>	27	19	16	28
<i>grade 6</i>	14	8	28	32

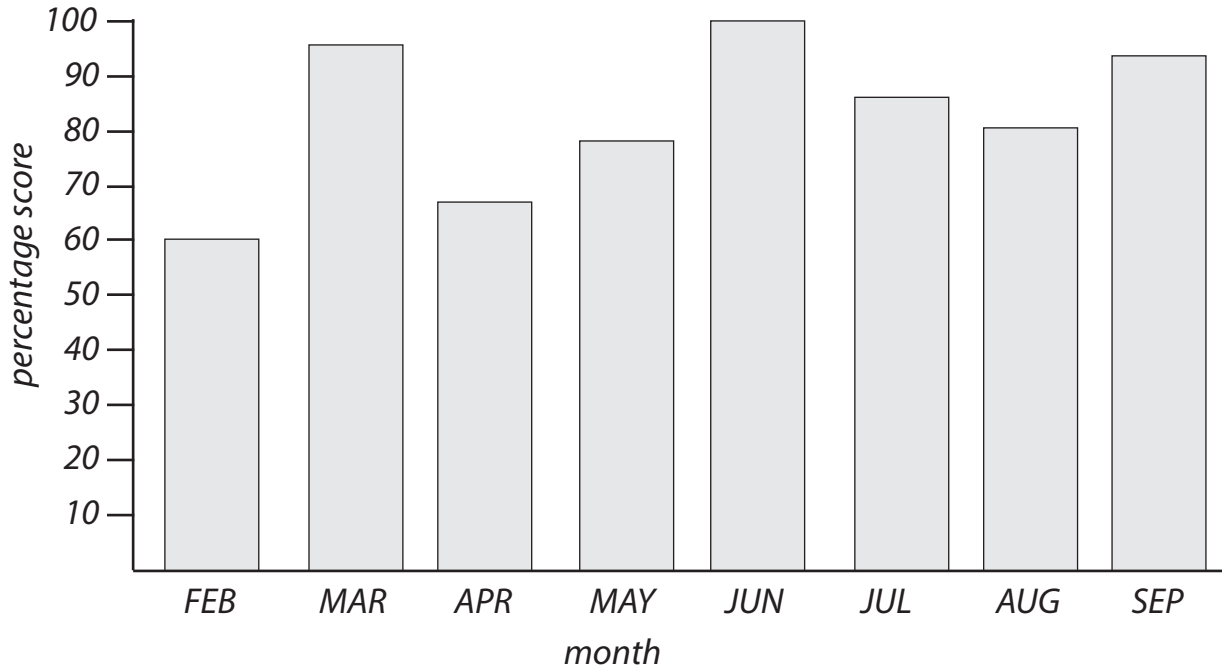
- a) How many students in grade 4 play netball? _____
- b) In which grade do nineteen students play hockey? _____
- c) How many more students in grade 6 play tennis than hockey? _____
- d) How many students in grade 3 play football or tennis? _____
- e) Twelve students in grade 6 play no sports. How many students in Grade 6? _____
- f) Which is the most played sport in grade 5? _____
- g) Which is the most played sport, including all four grades? _____
- h) In which grade do twice as many students play football than tennis? _____

2) Construct a bar graph of the sports played in grade 4.



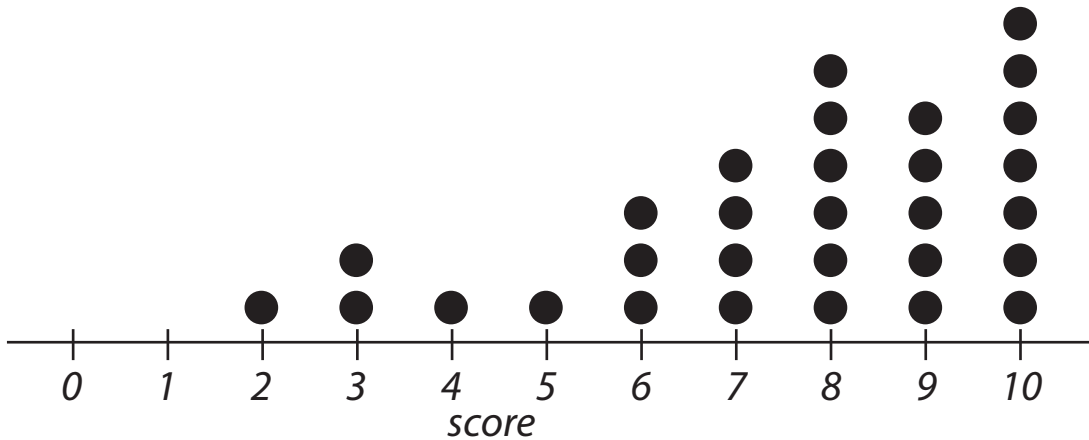
Name: _____

3) The graph displays Sam's scores in eight monthly tests.



- a) In which month did Sam score the worst mark? _____
- b) In which month did Sam score 100%? _____
- c) In how many months did Sam score more than 70%? _____
- d) In which month did Sam score 78%? _____
- e) What is the difference between Sam's best and worst score? _____

4) The dot plot shows how thirty students scored on a spelling test out of 10.



- a) How many students received a perfect score? _____
- b) How many students scored less than seven? _____
- c) How many students scored all the words incorrectly? _____