



How many altogether?



+



1

2

3

4

5



+




1

2


3

4

5



+




1

2


3

4

5



+




1

2


3

4

5



+



1

2

3

4

5

Ideas: *Work with the child.

*Colour the number to show the answer.