

Name : \_\_\_\_\_

Subtract 10 - Numbers up to 50.

$33 - 10 = \underline{\quad}$

$42 - 10 = \underline{\quad}$

$48 - 10 = \underline{\quad}$

$40 - 10 = \underline{\quad}$

$45 - 10 = \underline{\quad}$

$47 - 10 = \underline{\quad}$

$43 - 10 = \underline{\quad}$

$31 - 10 = \underline{\quad}$

$14 - 10 = \underline{\quad}$

$11 - 10 = \underline{\quad}$

$38 - 10 = \underline{\quad}$

$45 - 10 = \underline{\quad}$

$13 - 10 = \underline{\quad}$

$49 - 10 = \underline{\quad}$

$45 - 10 = \underline{\quad}$

$32 - 10 = \underline{\quad}$

$29 - 10 = \underline{\quad}$

$37 - 10 = \underline{\quad}$

$23 - 10 = \underline{\quad}$


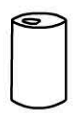



$44 - 10 = \underline{\quad}$

## Working Mathematically

Help Ernie work out how much food he has left in his shop.

Fill in the table



	started with	Sold	How many left
	26	10	16
	45	10	
	49	10	
	37	10	
	22	10	