
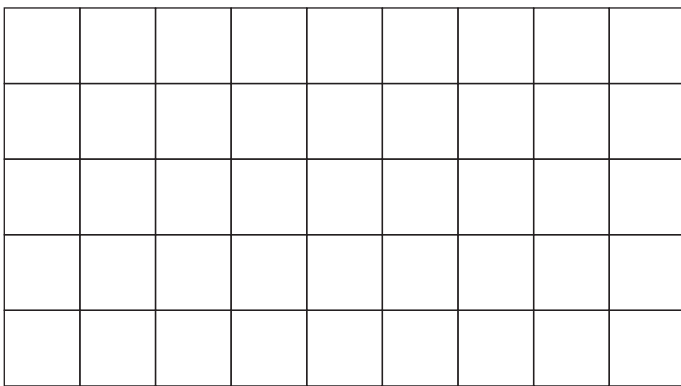


Name: \_\_\_\_\_

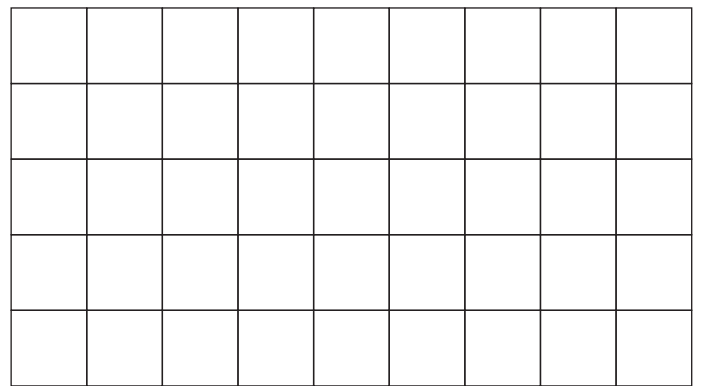
1) Which shape has the greatest perimeter?



2) Draw a square with a perimeter of 16 centimeters.

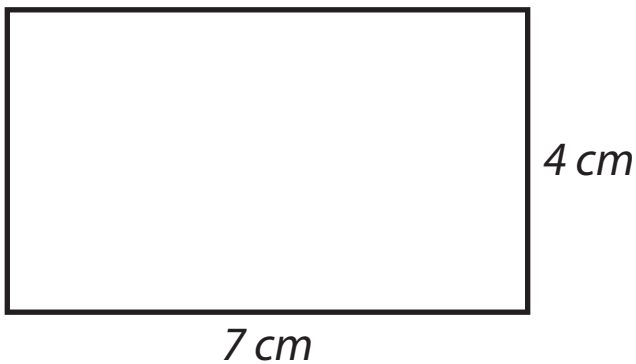


3) Draw a rectangle with a perimeter of 18 centimeters.

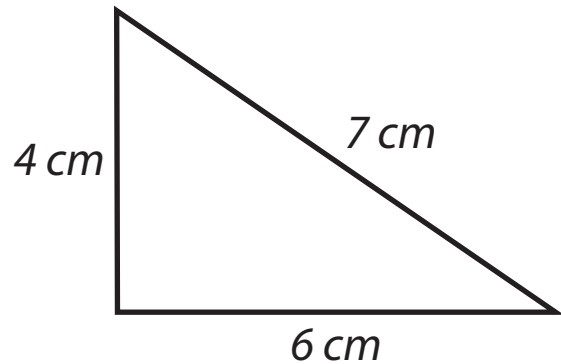


4) Calculate the perimeter of each shape.

*\*\*not to scale*




perimeter = \_\_\_\_\_ cm



perimeter = \_\_\_\_\_ cm

Name: \_\_\_\_\_

5) What is the perimeter of the square?



6 cm

perimeter = \_\_\_\_\_ cm


6) The rectangle has a perimeter of 28 centimeters. What is the length of the side marked 'X'? \_\_\_\_\_



10 cm

\*\*not to scale

7) Using a ruler and a piece of string, explain how you could measure the circumference of this circle.



\_\_\_\_\_

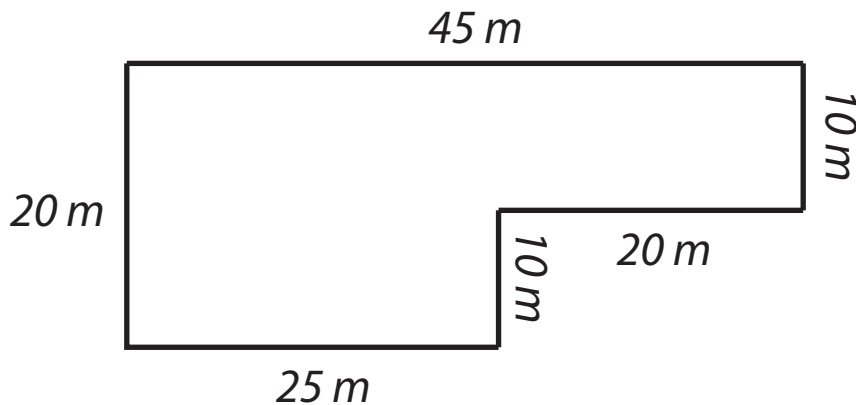
\_\_\_\_\_

\_\_\_\_\_

\_\_\_\_\_

8) The dimensions of Terry's yard are shown.

\*\*not to scale



a) What is the perimeter of Terry's yard? \_\_\_\_\_ m

b) Terry wants to build a fence around the yard's perimeter. How much will it cost if fencing costs \$10 per meter \_\_\_\_\_