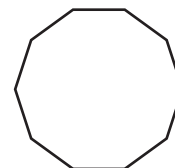
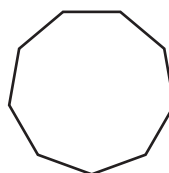
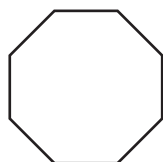
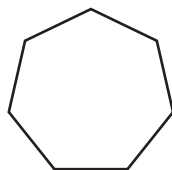
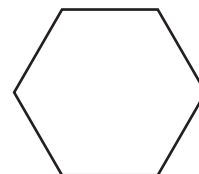
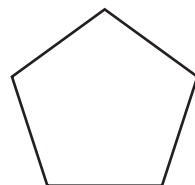
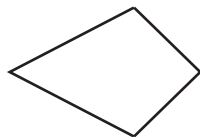
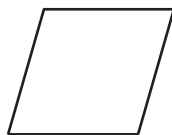
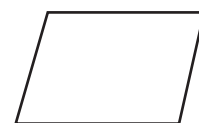
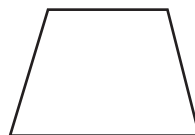

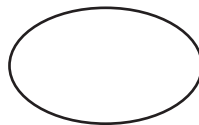



Two-dimensional Shapes

Name: _____

Name each shape

trapezium, decagon, semicircle, hexagon, triangle, circle, octagon, oval,
square, pentagon, heptagon, parallelogram, nonagon, kite, rhombus, rectangle



Any plane shape with four straight sides is called a quadrilateral.

Draw five quadrilaterals